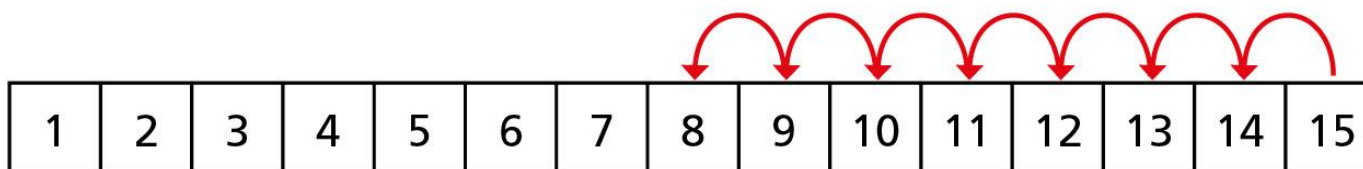



## Subtraction – crossing 10 (counting back)

- 1 There are 15 cookies in a jar.  
Mo eats 7 cookies.  
He counts back 7 from 15

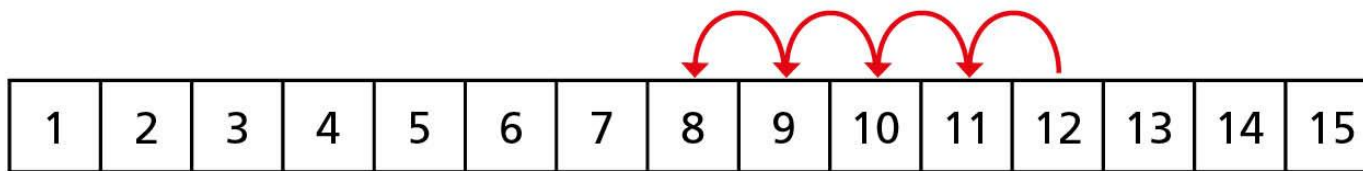


How many cookies does Mo have left?

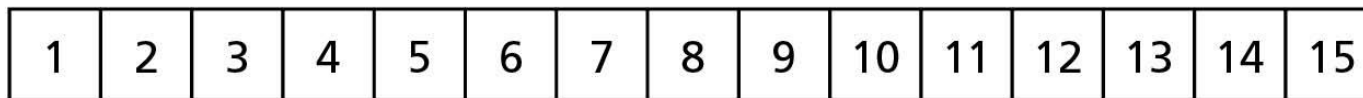


**2** Use the number tracks to help you.

a)  $12 - 4 =$



b)  $12 - 5 =$



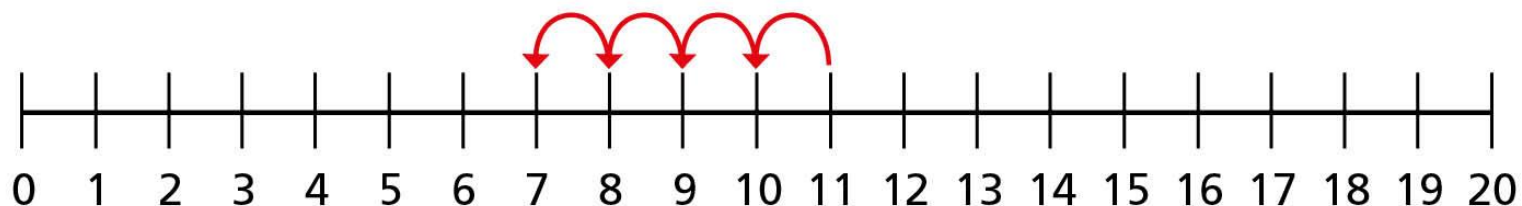
2 c)  $12 - 7 =$

1	2	3	4	5	6	7	8	9	10	11	12	13	14	15
---	---	---	---	---	---	---	---	---	----	----	----	----	----	----

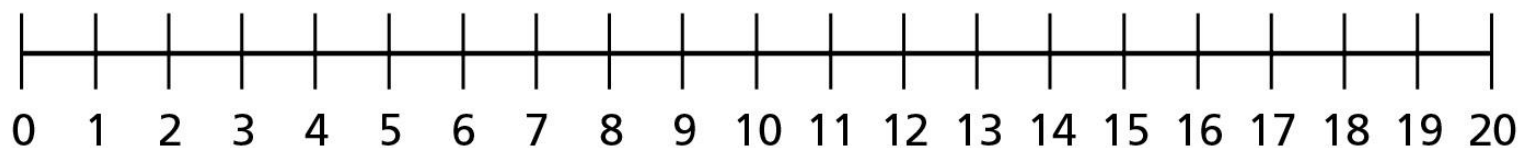


**3** Use the number lines to help you.

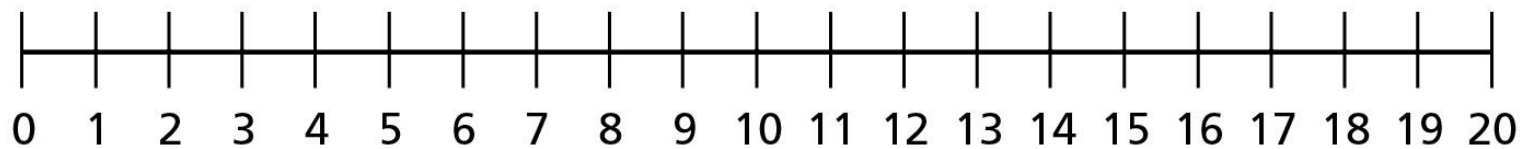
a)  $11 - 4 =$



**3** b)  $16 - 9 =$

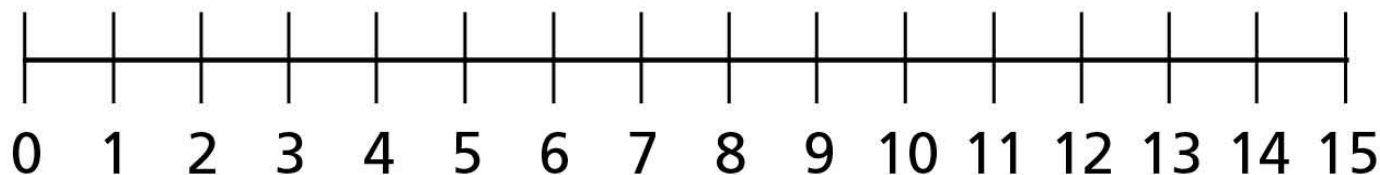


c)  $14 - 11 =$





- 4 There are 13 toys in a box.  
Kim takes some toys out of the box.  
There are 5 toys left in the box.  
How many toys does Kim take out of the box?



Kim takes

toys out of the box.