





## Hide-a-Saurus Addition to 10

Add the number of dinosaurs and write your answers in the boxes.

 +  =

 +  =


 +  =

 +  =

 +  =

## Hide-a-Saurus Addition to 10

Solve the calculations and write your answers in the boxes.

1 +  =

4 +  =

5 +  =

3 +  =

7 +  =

## Hide-a-Saurus Addition to 10

Work out the calculation and write the missing numbers in the boxes.

Then, write the number sentences on the lines below.

 $4 + \boxed{\phantom{00}} = \boxed{8}$

$\boxed{6} + 3 \text{ blue dinosaurs} = \boxed{\phantom{00}}$

$\boxed{5} + 4 \text{ purple dinosaurs} = \boxed{\phantom{00}}$

 $2 + 2 \text{ red dinosaurs} = \boxed{\phantom{00}}$

 $6 + \boxed{\phantom{00}} = \boxed{10}$