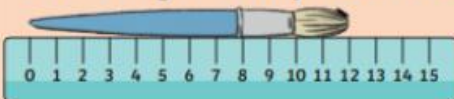


Measure Length (2)

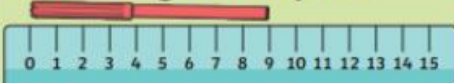


How long is the paintbrush?



The paintbrush is ____cm long.

How long is the pen?



The pen is ____cm long.

How tall is the pack of pencils?



The pack of pencils is ____cm tall.

How tall is the pack of crayons?



The pack of crayons is ____cm tall.

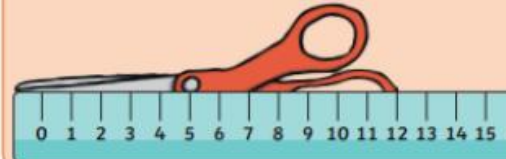
The _____ are shorter than the _____.

The _____ are taller than the _____.

Measure Length (2)

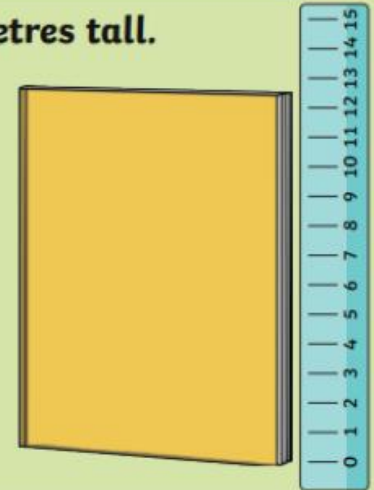


The scissors are 12cm long.



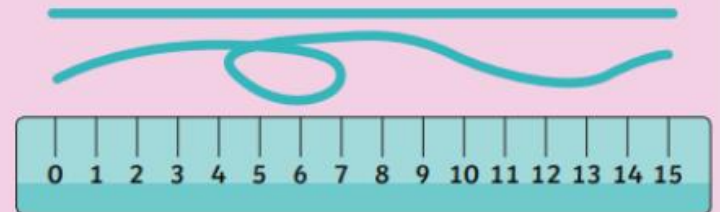
Do you agree?
Explain why or why not.

The book is 13 centimetres tall.



Is this correct?
Tell me about your answer.

The ribbons are both 15cm long.



Is this true? Can you find a way to prove it?